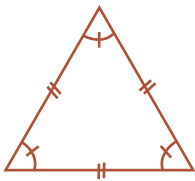
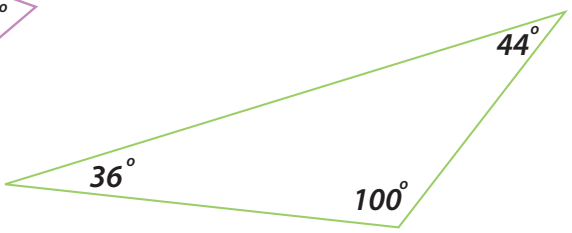
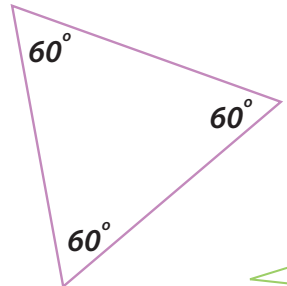
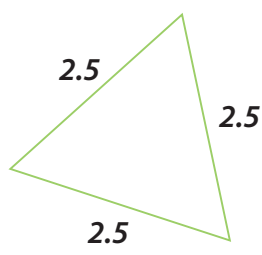
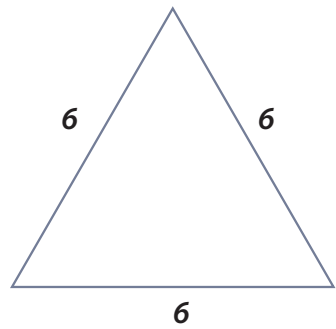
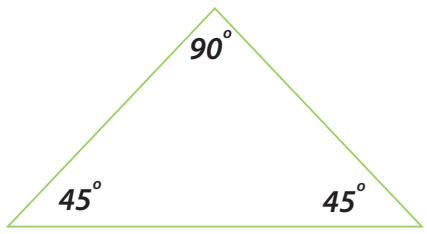
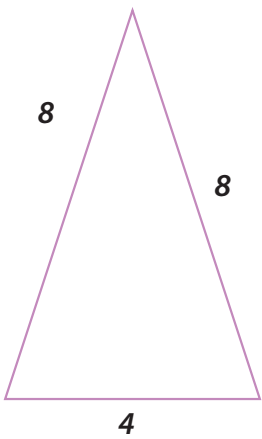


All About Equilateral Triangles



An equilateral triangle has 3 equal sides and 3 equal angles of 60 degrees each. Look at the triangles below. Color the equilateral triangles, then answer the questions.



1. Triangle ABC is 3 inches long on each side. Is it an equilateral triangle? Circle yes or no.

Yes No

2. Triangle DEF's sides measure 5 inches, 5 inches, and 8 inches. Is it an equilateral triangle? Circle yes or no.

Yes No

3. Triangle PQR is an equilateral triangle. Find the value of each angle in triangle PQR.

