

Name: _____

Date: _____



All About Trapezoids



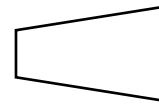
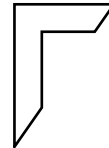
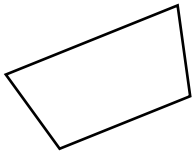
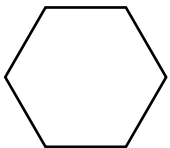
How many sides does a trapezoid have?

How many sets of parallel sides does a trapezoid have?

Where in the real world do you see trapezoids?

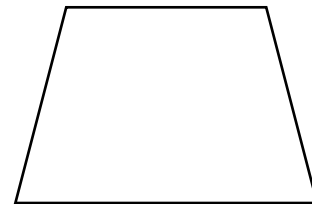
How would you describe a trapezoid?

Circle the shapes that are trapezoids.



Draw a trapezoid.

Draw the line of symmetry on this trapezoid.



Draw a picture using as many trapezoids as you can.