

Name: _____

Date: _____



All About Hexagons



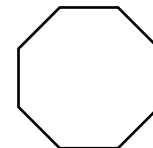
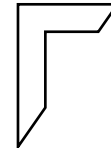


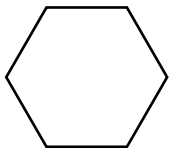
How many sides does a hexagon have?

How many angles does a hexagon have?

Where in the real world do you see hexagons?

What is the difference between a regular and irregular hexagon?

Circle the shapes that are hexagons.



Draw a regular hexagon.

Draw an irregular hexagon.

Draw lines of symmetry on this hexagon. What other shapes do you see inside of this regular hexagon? Draw the shapes directly on the hexagon, and name them.

