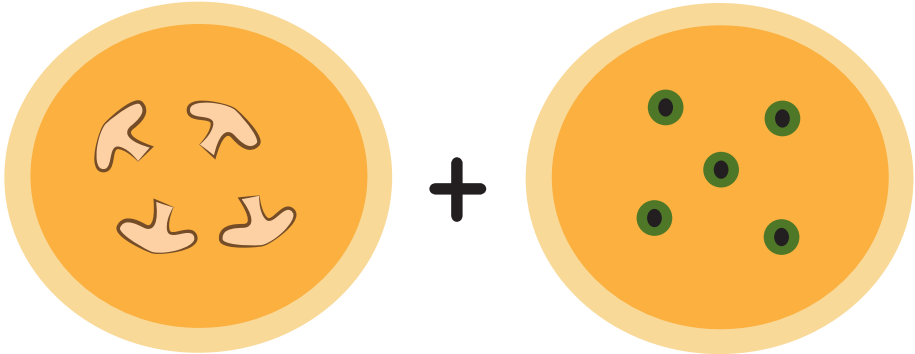


Name: _____

Date: _____

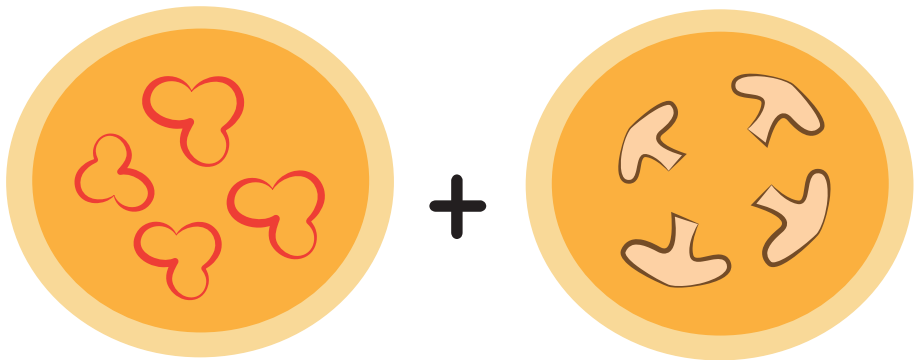
Addition With Pictures: Pizza Toppings

Count all of the pizza toppings and add them together. Write down how many there are.




$4 + 5 = 9$

The first pizza has 4 mushroom toppings. The second pizza has 5 pepperoni toppings. The sum is 9, which is written on a three-line grid with a dashed number 9 for tracing.



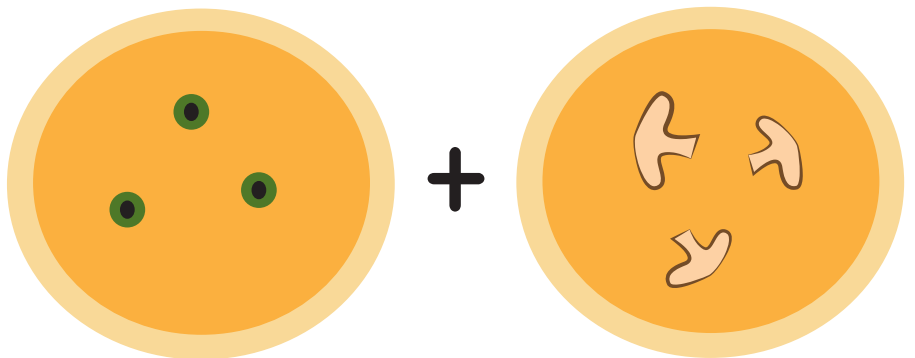
$4 + 4 = 8$

The first pizza has 4 heart-shaped toppings. The second pizza has 4 mushroom toppings. The sum is 8, which is written on a three-line grid.



$5 + 5 = 10$

The first pizza has 5 mushroom toppings. The second pizza has 5 heart-shaped toppings. The sum is 10, which is written on a three-line grid.



$3 + 3 = 6$

The first pizza has 3 pepperoni toppings. The second pizza has 3 mushroom toppings. The sum is 6, which is written on a three-line grid.