



Name: \_\_\_\_\_

Date: \_\_\_\_\_


# Addition to 10



Solve the addition problems.



$$1 + 3 = \underline{\quad}$$



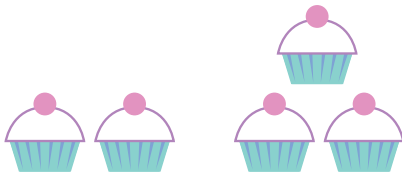
$$5 + 5 = \underline{\quad}$$




$$5 + 1 = \underline{\quad}$$




$$3 + 3 = \underline{\quad}$$




$$2 + 3 = \underline{\quad}$$



$$9 + 1 = \underline{\quad}$$



$$6 + 2 = \underline{\quad}$$



$$4 + 2 = \underline{\quad}$$