


Name _____

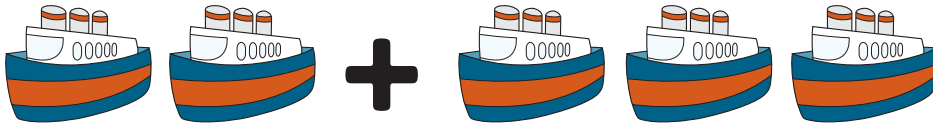
Date _____

Let's Go! Addition Practice


Add together the vehicles that are in each box, and write your answer in the box on the right.




$$\begin{array}{r} 1 \\ +1 \\ \hline \end{array}$$



$$\begin{array}{r} 2 \\ +3 \\ \hline \end{array}$$



$$\begin{array}{r} 4 \\ +2 \\ \hline \end{array}$$



$$\begin{array}{r} 3 \\ +1 \\ \hline \end{array}$$