


# Veggies

Addition 

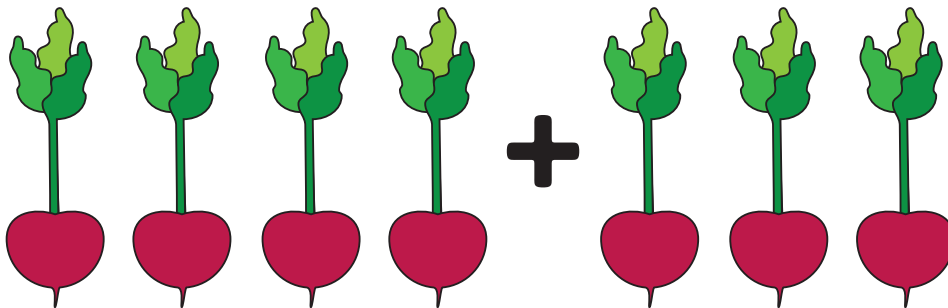
Add together the vegetables that are in each box and write your answer in the box on the right.

1




$$\begin{array}{r} 2 \\ +3 \\ \hline \end{array}$$

2




$$\begin{array}{r} 4 \\ +3 \\ \hline \end{array}$$

3



$$\begin{array}{r} 3 \\ +3 \\ \hline \end{array}$$

4



$$\begin{array}{r} 1 \\ +5 \\ \hline \end{array}$$