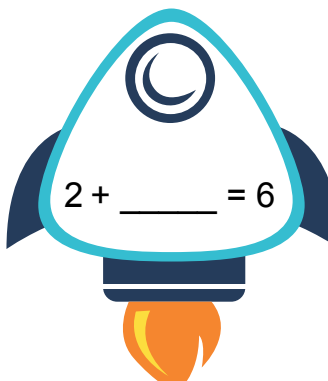
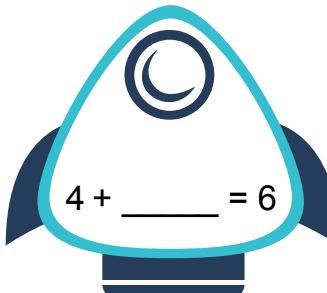
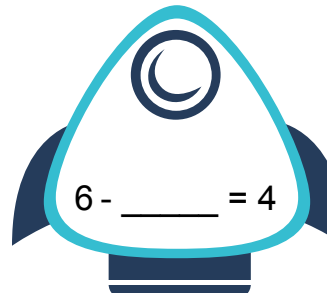
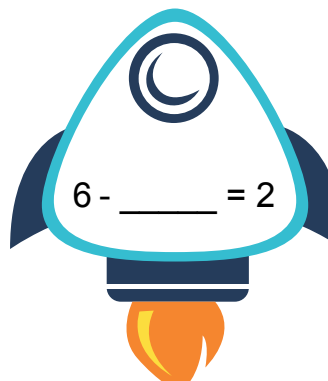

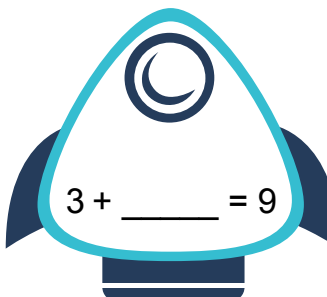
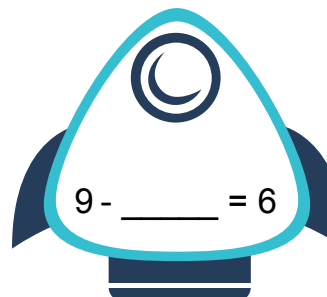


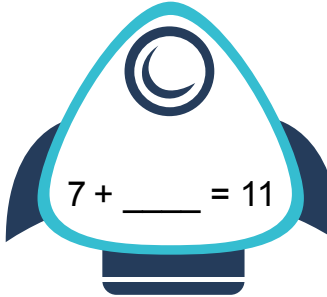
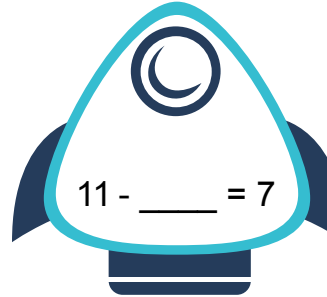



REACH FOR THE STARS

PILOTS, PREPARE FOR TAKEOFF!

Fill in the blank to complete the math problem on each spaceship below. Then write the three numbers you used for this fact family in the empty box.

 $2 + \underline{\quad} = 6$	 $4 + \underline{\quad} = 6$	 $6 - \underline{\quad} = 4$	 $6 - \underline{\quad} = 2$
	<input type="text"/> _____, _____, _____		
 $6 + \underline{\quad} = 9$	 $3 + \underline{\quad} = 9$	 $9 - \underline{\quad} = 6$	 $9 - \underline{\quad} = 3$
	<input type="text"/> _____, _____, _____		
 $4 + \underline{\quad} = 11$	 $7 + \underline{\quad} = 11$	 $11 - \underline{\quad} = 7$	 $11 - \underline{\quad} = 4$
	<input type="text"/> _____, _____, _____		