



Bath Time Math

How many of each picture do you see? Add them up and write the number in the box!

4

1



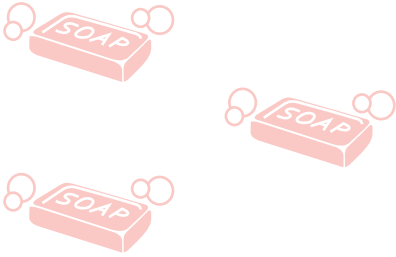
+




=

3

4




+




=

4

2



+



=