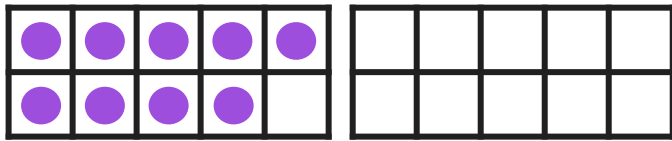


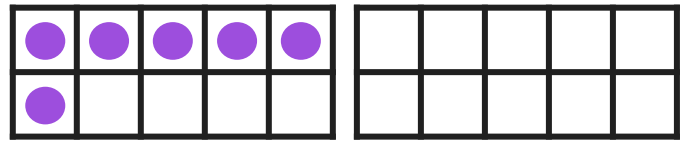
Adding Within 20

Using Ten Frames

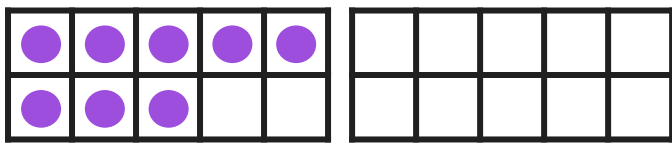
Directions: Use the ten frames to add. Draw more to make the number sentence true. Then write the answer.



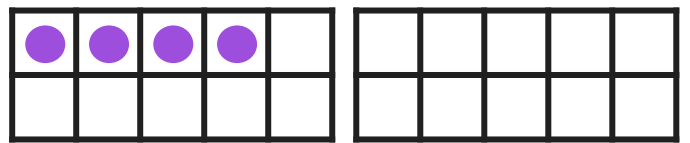
$$9 + 3 = \underline{\quad}$$



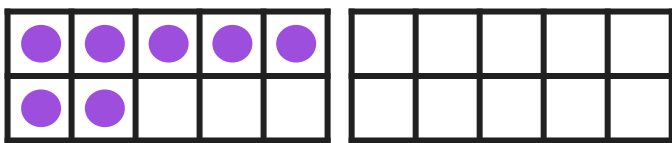
$$6 + 5 = \underline{\quad}$$



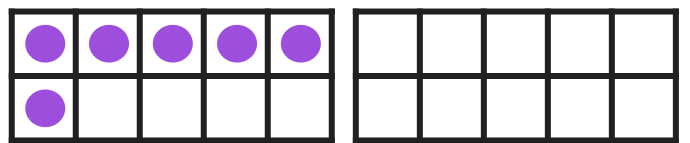
$$8 + 7 = \underline{\quad}$$



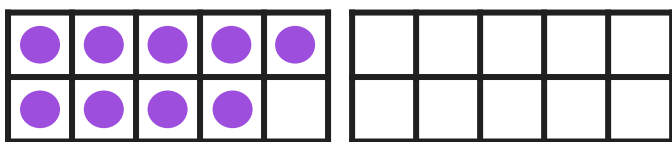
$$4 + 9 = \underline{\quad}$$



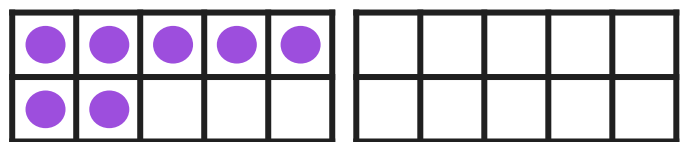
$$7 + 5 = \underline{\quad}$$



$$6 + 8 = \underline{\quad}$$



$$9 + 9 = \underline{\quad}$$



$$7 + 9 = \underline{\quad}$$