


Name: _____


Date: _____

Adding Vegetables


Solve the addition equations to find out how many vegetables are in the garden!




$1. 6 + 8 = \underline{\quad}$




$2. 1 + 11 = \underline{\quad}$




$3. 7 + 4 = \underline{\quad}$



$4. 5 + 10 = \underline{\quad}$



$5. 7 + 2 = \underline{\quad}$



$6. 8 + 2 = \underline{\quad}$