


Name _____ Date _____

Adding Balloons

Up to 10



Add. Use the pictures to help you.




$4 + 2 = \text{---}$



$6 + 1 = \text{---}$



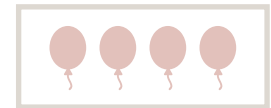
$5 + 2 = \text{---}$



$3 + 3 = \text{---}$




$4 + 1 = \text{---}$



$5 + 4 = \text{---}$



$6 + 3 = \text{---}$



$7 + 3 = \text{---}$