

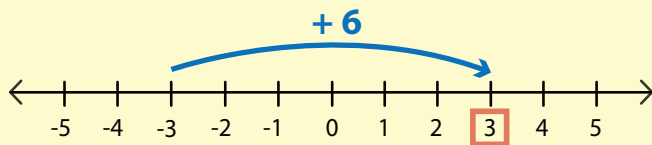
Name \_\_\_\_\_

Date \_\_\_\_\_

# Adding Integers Using Number Lines

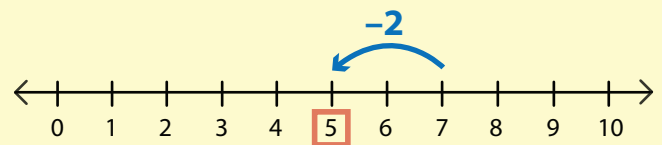
You can use a number line to add integers. Start at the first addend. To add a positive integer, move to the right. To add a negative integer, move to the left. The number of units you move is based on the second addend. The number you end on is the sum!

Try it for  $-3 + 6$ :



So,  $-3 + 6 = 3$ .

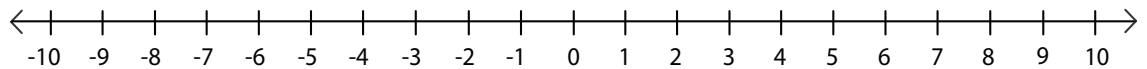
Try it for  $7 + (-2)$ :



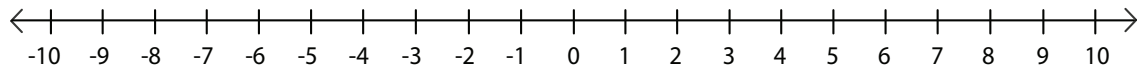
So,  $7 + (-2) = 5$ .

Use the number lines to add.

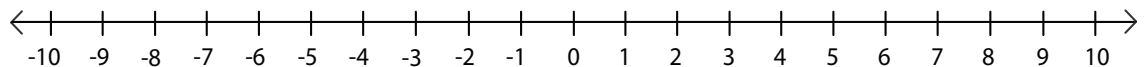
$8 + (-4) = \underline{\quad}$



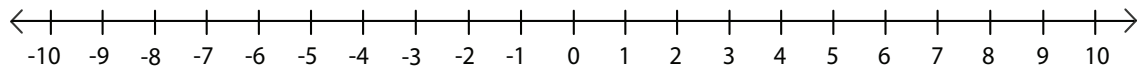
$-2 + (-5) = \underline{\quad}$



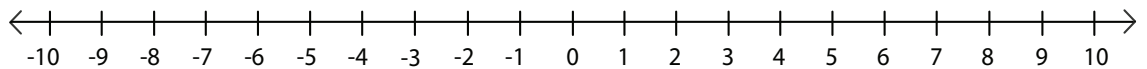
$-1 + 6 = \underline{\quad}$



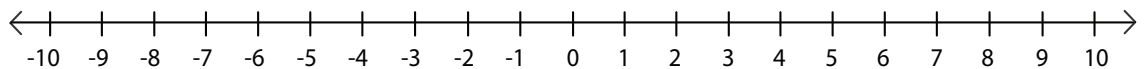
$-9 + 9 = \underline{\quad}$



$-7 + (-3) = \underline{\quad}$



$3 + (-9) = \underline{\quad}$



$-8 + 7 = \underline{\quad}$

