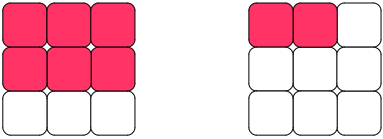
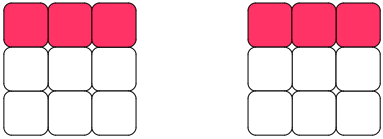
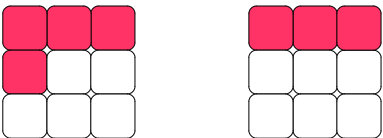
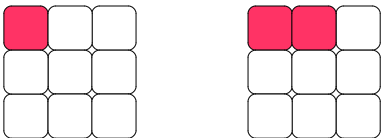


## Fraction Addition #2

Write the fraction of the colored boxes in the space provided and then add the fractions together.

A.  + 

         +          =                        +          =         

C.  + 

         +          =                        +          =         

Complete the addition of the fractions below.

E.  $\frac{3}{8} + \frac{5}{16} =$       F.  $\frac{1}{6} + \frac{2}{3} =$

G.  $\frac{2}{3} + \frac{4}{5} =$       H.  $\frac{3}{4} + \frac{2}{3} =$

I.  $\frac{3}{8} + \frac{1}{2} =$       J.  $\frac{1}{4} + \frac{3}{5} =$