

























# What is the Total Price? #4

Using the number above each coin or dollar, enter the total of that coin or dollar in the space provided below the coin or dollar. Then add the amounts below the money to calculate the price of the item pictured.

0	4	2	8	10			
					\$	.	
_____	_____	_____	_____	_____			
9	3	4	0	2			
					\$	.	
_____	_____	_____	_____	_____			
5	2	0	5	7			
					\$	.	
_____	_____	_____	_____	_____			
7	8	5	3	4			
					\$	.	
_____	_____	_____	_____	_____			