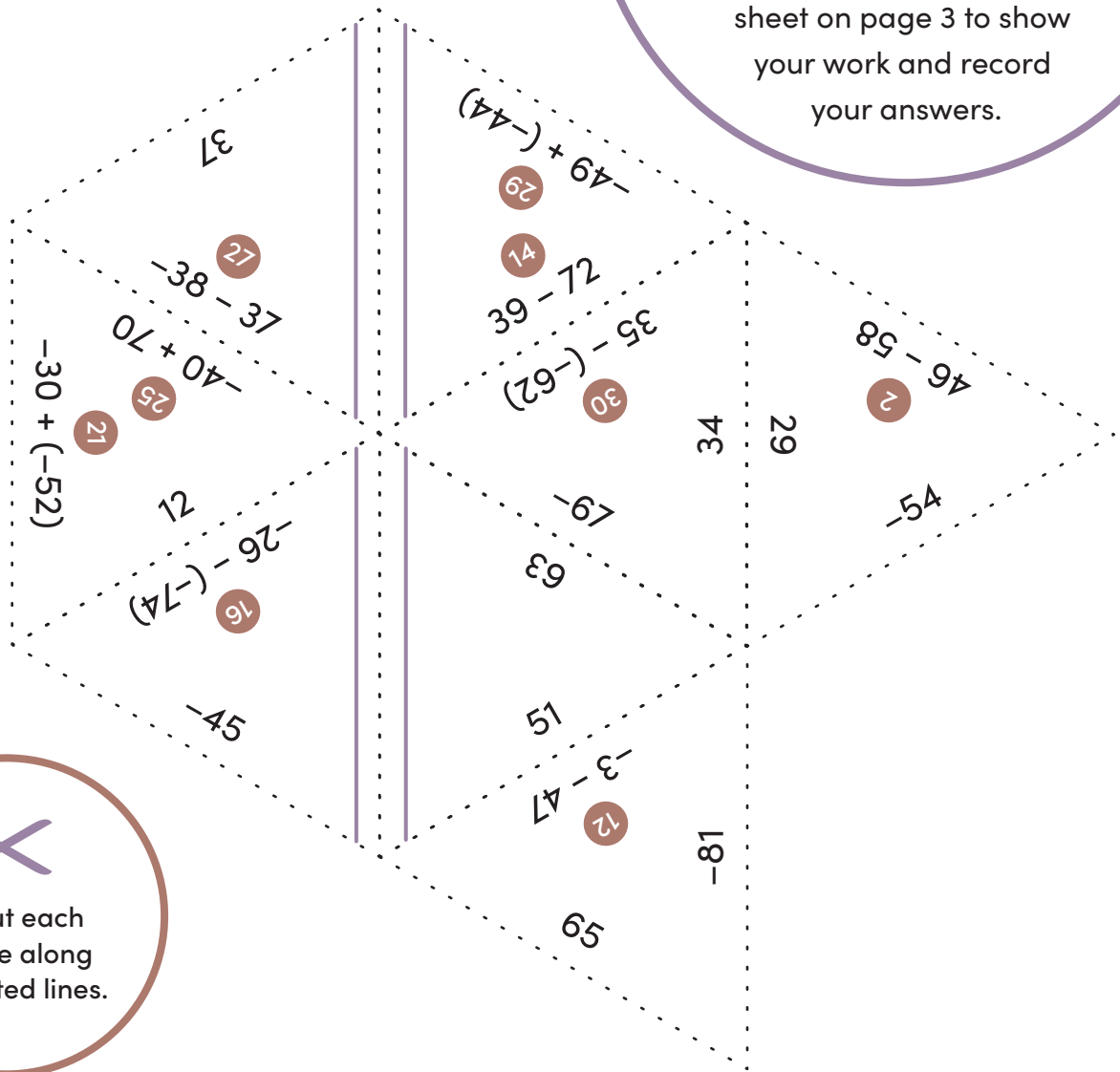



Adding and Subtracting Integers Puzzle

Cut out each of the triangles on pages 1 and 2. Match each numbered integer operation problem to its sum or difference. Line up each of the problems and solutions to complete the puzzle! Your final puzzle should form a large hexagon. Use the recording sheet on page 3 to show your work and record your answers.

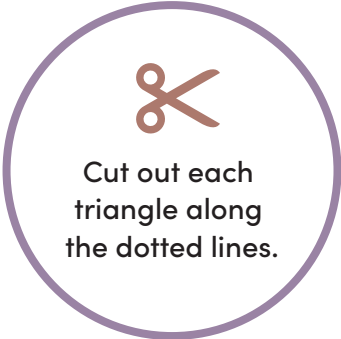



Cut out each triangle along the dotted lines.

Adding and Subtracting Integers Puzzle

Keep going! Cut out the triangles on this page, and complete the puzzle as instructed on page 1.

$14 - 80$ (19)
 $51 -$
 $-27 + (-18)$ (3)
 33
 $34 - (-22)$ (7)
 $38 - 51$ (1)
 $-67 - (-13)$ (22)
 $16 -$
 -82
 7
 -93 (21)
 $12 - 21$ (9)
 $50 - 96$ (92)
 72
 $35 - 49$ (9)
 $50 - 55$ (92)
 $55 + (-43)$ (13)
 $82 + 19 -$ (51)
 $43 + (-9)$ (5)
 $4 - (-68)$ (28)
 76
 $-25 + 62$ (7)
 $-20 - (-83)$ (6)
 -14
 $72 -$
 30
 $11 + (-53)$ (23)
 -17
 $63 - 06$ (8)
 $96 -$
 $-79 - 12$ (20)
 -12
 $-92 - (-85)$ (18)
 $08 - 51 -$ (4)
 -16
 -96
 84
 $(09 -) + 7 -$ (11)
 -50
 $-49 - 32$ (24)



Adding and Subtracting Integers

Recording Sheet

Show your work and record your solutions below.

1	2	3
4	5	6
7	8	9
10	11	12
13	14	15
16	17	18
19	20	21
22	23	24
25	26	27
28	29	30