









# Add One

Living things reproduce and have babies. Hens lay eggs and they hatch, becoming baby chicks. Count the baby chicks in the nest. Write the number of chicks in the nest on the line. How many chicks are not in the nest? Write that number on the line. When we add those together, how many chicks are there?

 $\quad + \quad = \quad$ <p>_____</p> <p>_____</p>	 $\quad + \quad = \quad$ <p>_____</p> <p>_____</p>	 $\quad + \quad = \quad$ <p>_____</p> <p>_____</p>
 $\quad + \quad = \quad$ <p>_____</p> <p>_____</p>	 $\quad + \quad = \quad$ <p>_____</p> <p>_____</p>	 $\quad + \quad = \quad$ <p>_____</p> <p>_____</p>