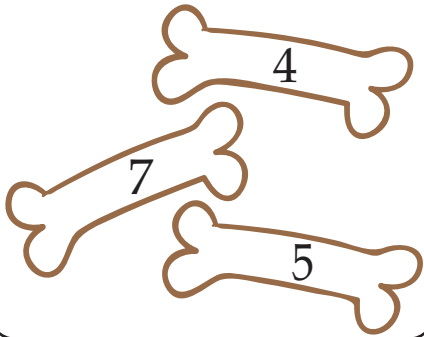




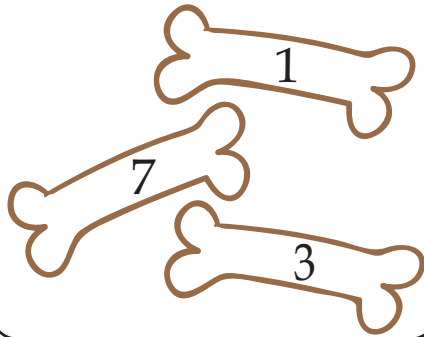
ADD THE NUMBERS

Spiky needs help finding the right bone.
Add the numbers in each box and color
the bone with the correct answer.

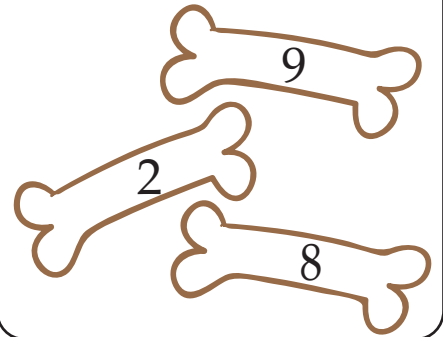
$2 + 5 = \text{-----}$



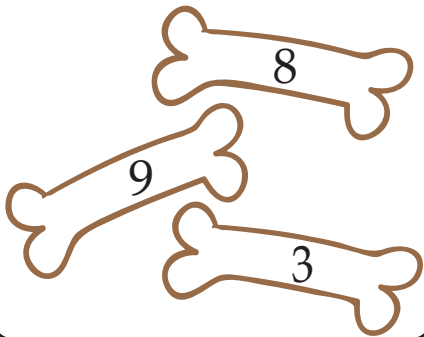
$1 + 2 = \text{-----}$




$3 + 6 = \text{-----}$



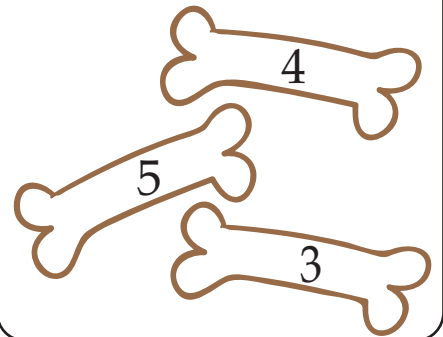
$5 + 3 = \text{-----}$




$7 + 1 = \text{-----}$



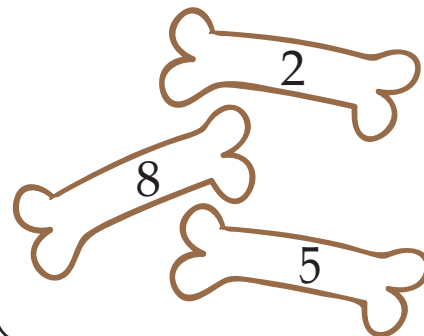
$1 + 4 = \text{-----}$



$2 + 5 = \text{-----}$



$4 + 4 = \text{-----}$



$3 + 3 = \text{-----}$

