

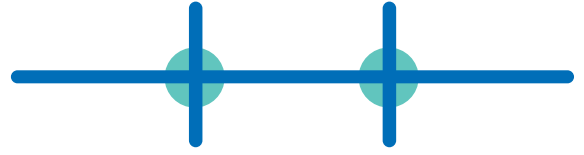
Name: _____

Date: _____

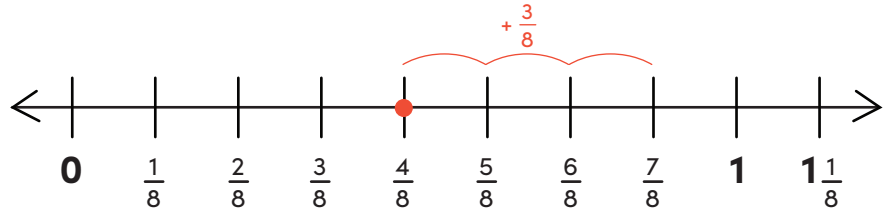
Add Fractions on a Number Line #2

Directions: Use each number line to add the fractions.

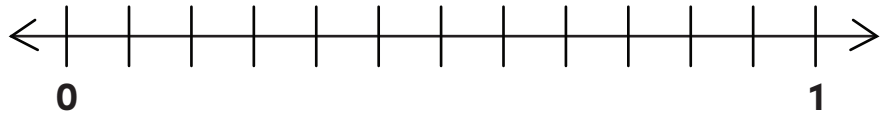
Remember to fill in the missing numbers on the blank number lines!




Example: $\frac{4}{8} + \frac{3}{8} = \frac{7}{8}$



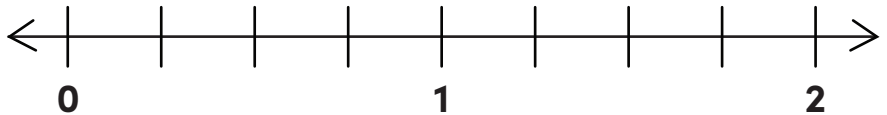
a. $\frac{6}{12} + \frac{4}{12} =$



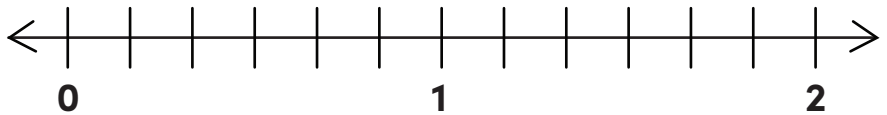
b. $\frac{2}{3} + \frac{1}{3} =$



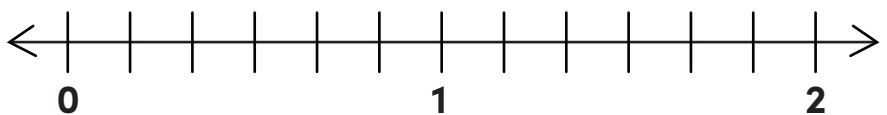
c. $\frac{3}{4} + \frac{3}{4} =$



d. $\frac{5}{6} + \frac{4}{6} =$



e. $\frac{3}{6} + \frac{5}{6} =$



Challenge!

f. $\frac{5}{8} + \frac{1}{4} =$

