

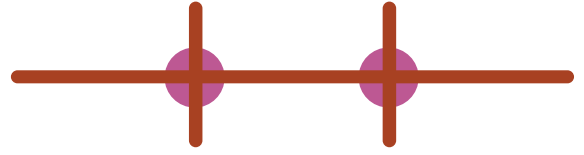
Name: _____

Date: _____

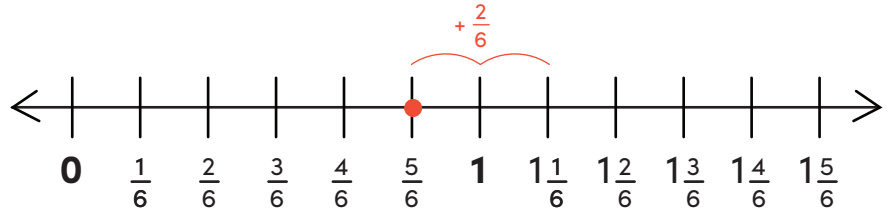
Add Fractions on a Number Line #1

Directions: Use each number line to add the fractions.

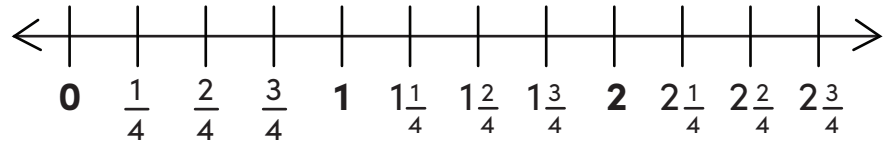
Remember to fill in the missing numbers on the blank number lines!



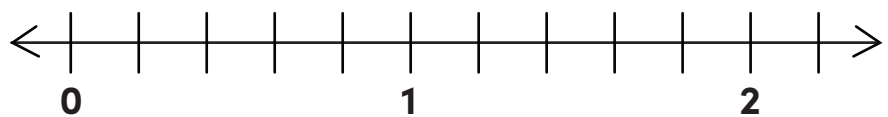
Example: $\frac{5}{6} + \frac{2}{6} = 1\frac{1}{6}$



a. $\frac{1}{4} + \frac{5}{4} =$



b. $\frac{3}{5} + \frac{2}{5} =$



c. $\frac{5}{8} + \frac{1}{8} =$



d. $\frac{2}{3} + \frac{4}{3} =$



e. $1\frac{1}{2} + \frac{1}{2} =$



Challenge!

f. $\frac{5}{6} + \frac{2}{3} =$

