

# Add and Compare #2


Add these numbers. Then compare the answers with these signs:



Equal (=) Greater than (>) Less than (<)

$$\begin{array}{r} 11 \\ + 47 \\ \hline \end{array}$$


58



$$\begin{array}{r} 24 \\ + 41 \\ \hline \end{array}$$


65

$$\begin{array}{r} 86 \\ + 54 \\ \hline \end{array}$$




$$\begin{array}{r} 15 \\ + 84 \\ \hline \end{array}$$

$$\begin{array}{r} 99 \\ + 21 \\ \hline \end{array}$$




$$\begin{array}{r} 66 \\ + 28 \\ \hline \end{array}$$

$$\begin{array}{r} 97 \\ + 17 \\ \hline \end{array}$$




$$\begin{array}{r} 41 \\ + 45 \\ \hline \end{array}$$

$$\begin{array}{r} 12 \\ + 75 \\ \hline \end{array}$$



$$\begin{array}{r} 62 \\ + 13 \\ \hline \end{array}$$

$$\begin{array}{r} 76 \\ + 83 \\ \hline \end{array}$$



$$\begin{array}{r} 95 \\ + 12 \\ \hline \end{array}$$

