

Add and Compare

Add these numbers. Then compare the answers with these signs:



Equal (=) Greater than (>) Less than (<)

$$\begin{array}{r} 41 \\ + 73 \\ \hline \end{array}$$


114



$$\begin{array}{r} 69 \\ + 13 \\ \hline \end{array}$$


82

$$\begin{array}{r} 52 \\ + 84 \\ \hline \end{array}$$




$$\begin{array}{r} 27 \\ + 40 \\ \hline \end{array}$$

$$\begin{array}{r} 40 \\ + 32 \\ \hline \end{array}$$



$$\begin{array}{r} 96 \\ + 51 \\ \hline \end{array}$$

$$\begin{array}{r} 85 \\ + 69 \\ \hline \end{array}$$




$$\begin{array}{r} 18 \\ + 87 \\ \hline \end{array}$$

$$\begin{array}{r} 45 \\ + 86 \\ \hline \end{array}$$



$$\begin{array}{r} 44 \\ + 18 \\ \hline \end{array}$$

$$\begin{array}{r} 42 \\ + 20 \\ \hline \end{array}$$



$$\begin{array}{r} 39 \\ + 23 \\ \hline \end{array}$$

