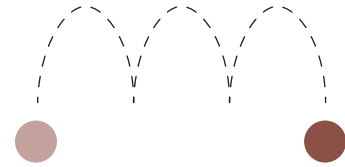


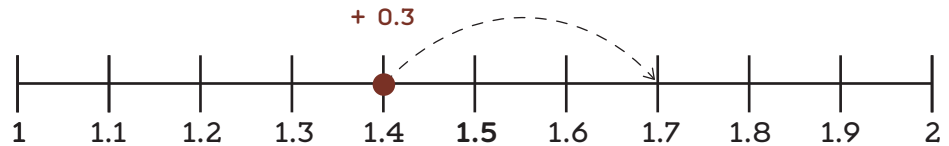
Name \_\_\_\_\_ Date \_\_\_\_\_

# Add and Subtract Decimals On a Number Line

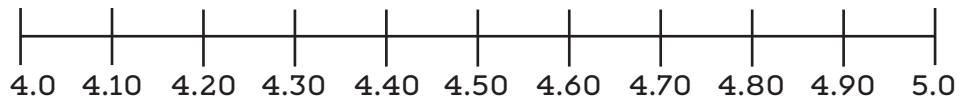


Directions: Use each number line to add and subtract decimals.  
Remember to label the missing numbers and the blank number lines!

Example:  $1.4 + 0.3 = 1.7$



a.  $4.0 + 0.5 =$  \_\_\_\_\_



b.  $2.8 - 0.7 =$  \_\_\_\_\_



c.  $0.60 + 0.2 =$  \_\_\_\_\_



d.  $1.9 - 0.4 =$  \_\_\_\_\_



e.  $0.7 + 0.30 =$  \_\_\_\_\_



f.  $11.80 - 0.10 =$  \_\_\_\_\_

