



# 5 Little Monkeys Swinging in a Tree

**Directions:** How many monkeys are left after the hungry alligator catches one? Count the monkeys and cross one off to find your answer. Then, solve the next problem.


$$\boxed{5} - 1 = \boxed{4}$$




$$\boxed{4} - 1 = \boxed{\phantom{0}}$$



$$\boxed{\phantom{0}} - 1 = \boxed{\phantom{0}}$$



$$\boxed{\phantom{0}} - 1 = \boxed{\phantom{0}}$$



$$\boxed{\phantom{0}} - 1 = \boxed{\phantom{0}}$$

