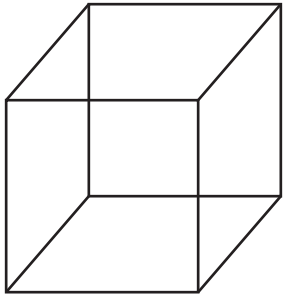
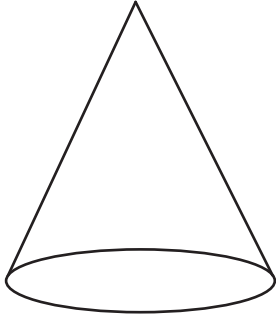
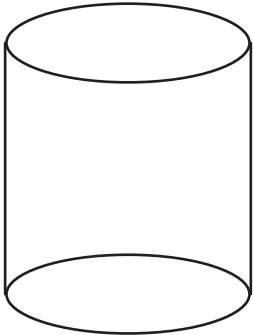
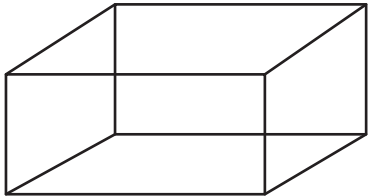
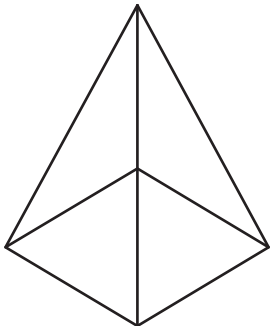


# 3D Shapes

Identify the 3D shape. Then, fill in the name of the shape and the number of faces, edges, and vertices for each shape.

<p><b>Name:</b></p> <p><b>Faces:</b></p> <p><b>Edges:</b></p> <p><b>Vertices:</b></p> 	<p><b>Name:</b></p> <p><b>Faces:</b></p> <p><b>Edges:</b></p> <p><b>Vertices:</b></p> 
<p><b>Name:</b></p> <p><b>Faces:</b></p> <p><b>Edges:</b></p> <p><b>Vertices:</b></p> 	<p><b>Name:</b></p> <p><b>Faces:</b></p> <p><b>Edges:</b></p> <p><b>Vertices:</b></p> 
<p><b>Name:</b></p> <p><b>Faces:</b></p> <p><b>Edges:</b></p> <p><b>Vertices:</b></p> 	<p><b>Name:</b></p> <p><b>Faces:</b></p> <p><b>Edges:</b></p> <p><b>Vertices:</b></p> 