

Word Problem Round-Up: Addition #3

When we add, we find the total of two or more numbers.

$$2 + 3 = 5$$




ANSWER KEY






Directions: Read each problem and solve. Write the answer in the box.

1. Jen has 5  .
She got 6 more  .
How many  does she have now?




$$\begin{array}{r} 5 \\ + 6 \\ \hline 11 \end{array}$$

2. Ricky found 8  .
Denise found 6  .
How many  did they find in all?

$$\begin{array}{r} 8 \\ + 6 \\ \hline 14 \end{array}$$

3. Mateo has 6 toy  .
Camila has 4 toy  .
How many  do they have in all?

$$\begin{array}{r} 6 \\ + 4 \\ \hline 10 \end{array}$$

4. Hakeem has 7  .
His mother gave him 5 more  .
How many  does he have now?

$$\begin{array}{r} 7 \\ + 5 \\ \hline 12 \end{array}$$