

Word Problems: Addition

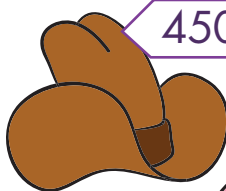
Let's read these problems. Write a number sentence and solve.




509



859



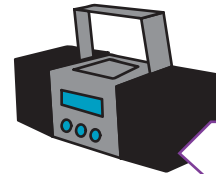
450



322



276



950



632

Lea bought a cap and a teddy bear. How many tokens did Lea spend?

Matt bought 2 cowboy hats. How many tokens did Matt spend?

Jill bought a necklace and a doll. How many tokens did she spend?

Sean bought a radio and a teddy bear. How many tokens did he spend?

Drew bought 2 radios. How many tokens did he spend?

May bought headphones and a cap. How many tokens did she spend?

Who spent the most tokens of all the kids?

Who spent the least amount of tokens of all the kids?

Word Problems: Addition

Let's read these problems. Write a number sentence and solve.




509



859



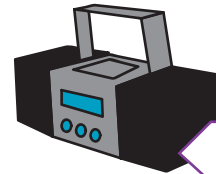
450



322



276



950



632

Lea bought a cap
and a teddy bear.
How many tokens
did Lea spend?

$$\begin{array}{r} 322 \\ + 859 \\ \hline 1181 \end{array}$$

Matt bought 2
cowboy hats.
How many tokens
did Matt spend?

$$\begin{array}{r} 450 \\ + 450 \\ \hline 900 \end{array}$$

Jill bought a neck -
lace and a doll.
How many tokens
did she spend?

$$\begin{array}{r} 276 \\ + 632 \\ \hline 908 \end{array}$$

Sean bought a radio
and a teddy bear.
How many tokens
did he spend?

$$\begin{array}{r} 950 \\ + 859 \\ \hline 1809 \end{array}$$

Drew bought 2
radios. How
many tokens did
he spend?

$$\begin{array}{r} 950 \\ + 950 \\ \hline 1900 \end{array}$$

May bought head -
phones and a cap.
How many tokens
did she spend?

$$\begin{array}{r} 509 \\ + 322 \\ \hline 831 \end{array}$$

Who spent the
most tokens of all
the kids?

Drew

Who spent the least
amount of tokens of
all the kids?

May