


# Who Got the Cookie?




In the Cookie Race Game, players try to get to 100 faster than their opponent.


Reese and Gage played the Cookie Race Game yesterday. This is what their game board looks like so far.



**Reese**



**Gage**



Cookies (Hundreds)	Chocolate Bars (Tens)	Sprinkles (Ones)

1. Circle who is close to 100. **Reese** <sup>(78)</sup> **Gage** <sup>(80)</sup>

Next, they rolled these numbers

2. Circle who got the cookie first.

	+		=	8
	+		=	7
	+		=	9
<b>Reese's Total:</b>				<b>24</b>

	+		=	5
	+		=	5
	+		=	8
<b>Gage's Total:</b>				<b>18</b>

**Reese**

$$\begin{array}{r} 78 \\ + 24 \\ \hline 102 \end{array}$$



**Gage**

$$\begin{array}{r} 80 \\ + 18 \\ \hline 98 \end{array}$$