


WHICH ONE IS LONGER?

Order each row of objects from shortest to longest.
Write "1" under the shortest item. Write "3" under the longest item.



3



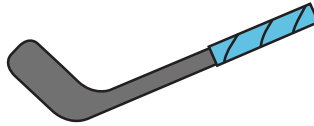
1



2




1



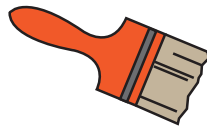
3



2



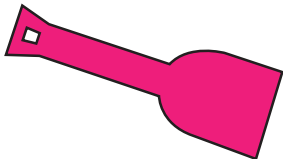
3



2



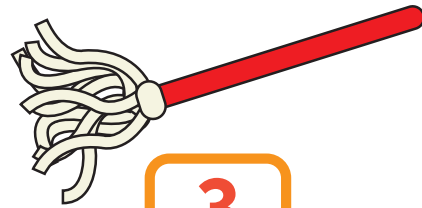
1



2




1



3

Challenge Draw an object that you think is longer than the one below!



Answers will vary

