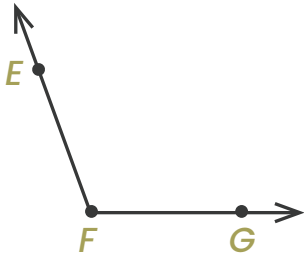




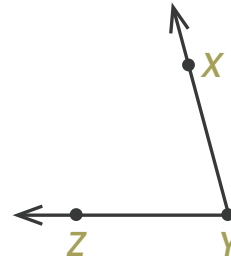
What's the Angle?



Part 1: Choose the best estimate for the measure of each angle.

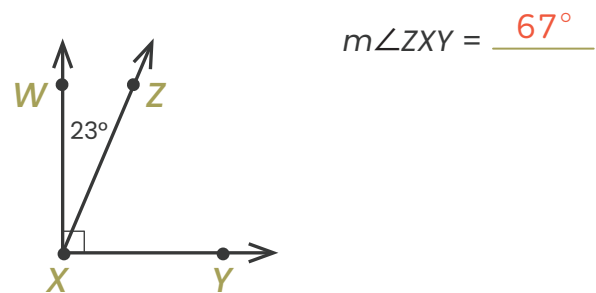
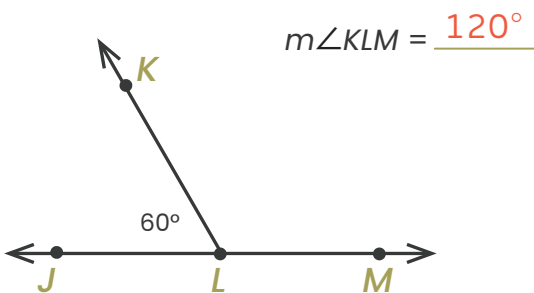
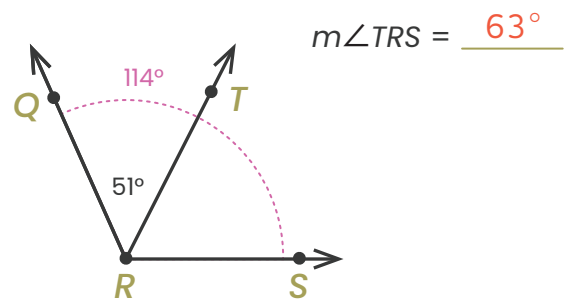
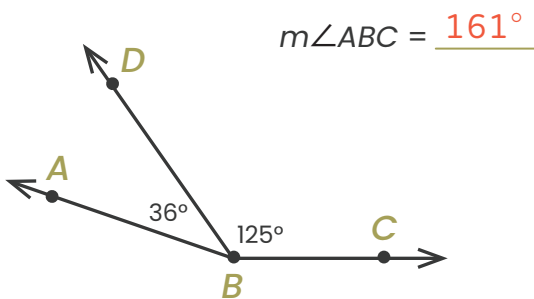


- a. 90°
b. 110°
 c. 29°
 d. 75°

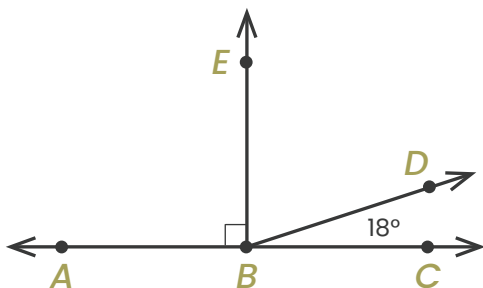


- a. 29°
b. 75°
 c. 90°
 d. 110°

Part 2: Find the angle measure for each problem.



Part 3: Use the image to help you answer the following questions.



- Name a right angle. $\angle ABE$ or $\angle EBC$
- What is the measure of $\angle EBD$? $\underline{72^\circ}$
- What is the measure of $\angle ABD$? $\underline{162^\circ}$