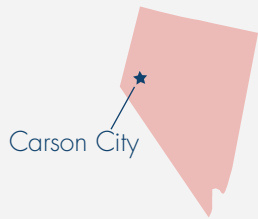


# What's That State? 1 Answer Key

Use a map to help you identify the states by their shapes.  
You can also use the state capitals as clues.



**Nevada**

---



**Texas**

---



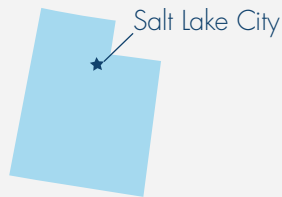
**Nebraska**

---



**New York**

---



**Utah**

---



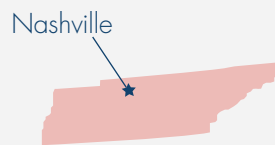
**South Carolina**

---



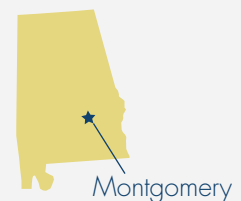
**Illinois**

---



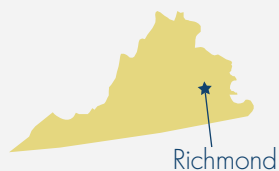
**Tennessee**

---



**Alabama**

---



**Virginia**

---



**Missouri**

---



**Washington**

---