

Name: \_\_\_\_\_

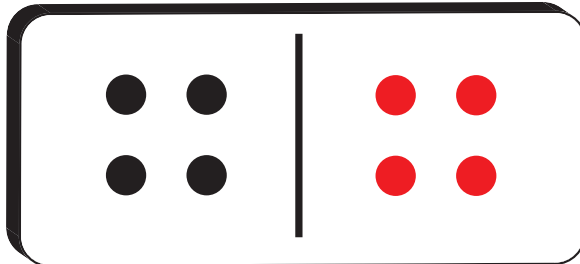
Date: \_\_\_\_\_

**Answer Key**

# WHAT'S MISSING?


**Directions:** Look at the numbers. These numbers represent the whole amount. Part of the whole is shown with the dots. Can you figure out how many dots are missing? Draw them in the blank box. Next, use the word bank to finish the sentence frame.

8




four and four is eight

12




five and seven is twelve

10




three and seven is ten

15



seven and eight is fifteen



**WORD BANK**

four    five    twelve    ten

eight    seven    three    fifteen

