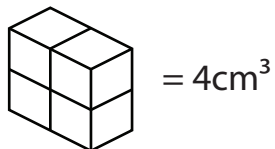



Name: _____

Date: _____

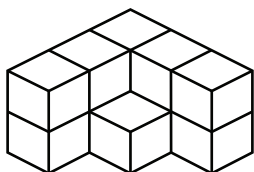
Volume Cubed # 1

Volume is the measure of space inside of a solid object.
Volume is measured in **cubic units (cm³)**.



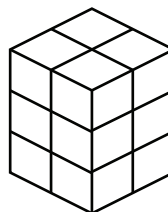
Directions: Count the number of centimeter cubes to find the volume of the objects.

1.



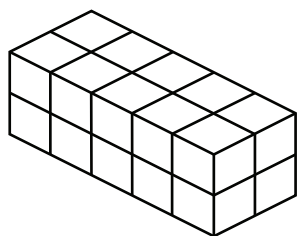
11cm³ = Volume

2.



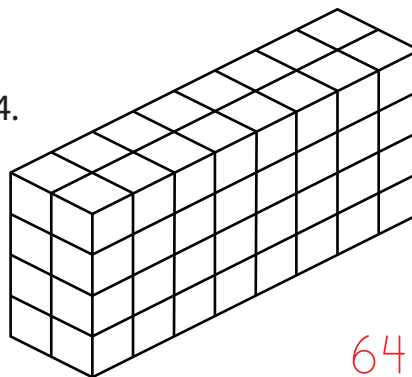
12cm³ = Volume

3.



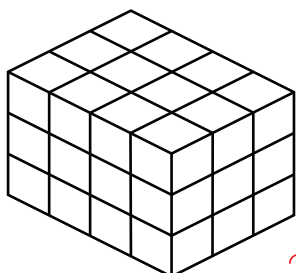
20cm³ = Volume

4.



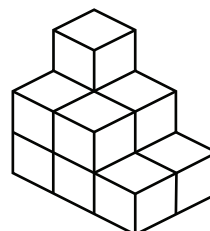
64cm³ = Volume

5.



36cm³ = Volume

6.



11cm³ = Volume