




Grade 1


# Valentine Math


Add the numbers. Use the chocolate kisses to help you count!


1. 
$$\begin{array}{r} 3 \\ + 6 \\ \hline 9 \end{array}$$



2. 
$$\begin{array}{r} 7 \\ + 1 \\ \hline 8 \end{array}$$



3. 
$$\begin{array}{r} 1 \\ + 8 \\ \hline 9 \end{array}$$



4. 
$$\begin{array}{r} 5 \\ + 3 \\ \hline 8 \end{array}$$



5. 
$$\begin{array}{r} 1 \\ + 3 \\ \hline 4 \end{array}$$



6. 
$$\begin{array}{r} 4 \\ + 3 \\ \hline 7 \end{array}$$


7. 
$$\begin{array}{r} 3 \\ + 3 \\ \hline 6 \end{array}$$


8. 
$$\begin{array}{r} 5 \\ + 2 \\ \hline 7 \end{array}$$


9. 
$$\begin{array}{r} 2 \\ + 3 \\ \hline 5 \end{array}$$


10. 
$$\begin{array}{r} 1 \\ + 5 \\ \hline 6 \end{array}$$


11. 
$$\begin{array}{r} 1 \\ + 4 \\ \hline 5 \end{array}$$


12. 
$$\begin{array}{r} 2 \\ + 1 \\ \hline 3 \end{array}$$
