



Answer Key

Units of Area

Area is the measurement of the square units inside a shape. Each square inside the shape is 1 square unit.

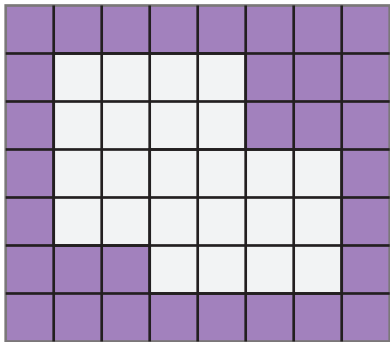


Area: 6 square units



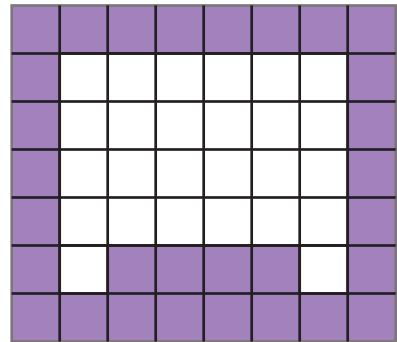
Directions: Find the area of each white shape by counting the square units.

1.



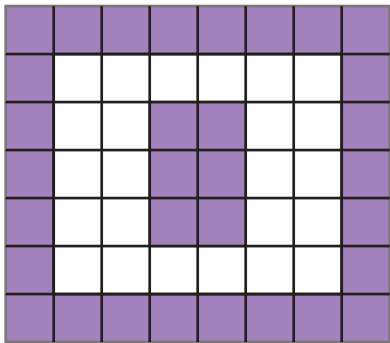
Area: 24 square units

2.



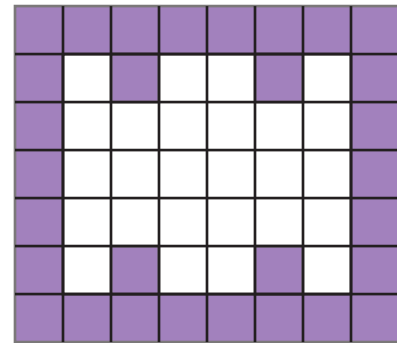
Area: 26 square units

3.



Area: 24 square units

4.



Area: 26 square units

Your turn! Create a shape that has an area of 14 square units.

Answers will vary, but may include:

