
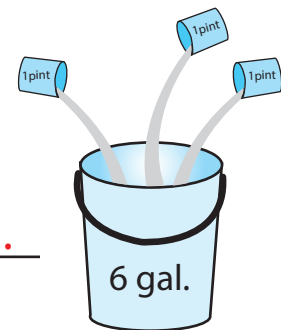
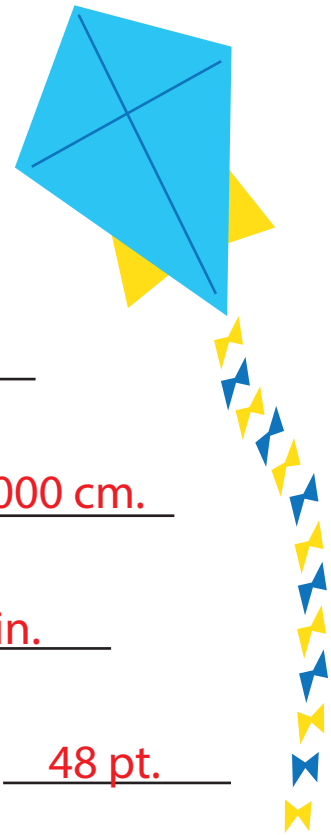



Measurement Conversion

Solve each problem.

1. Which weighs more, 4 tons or 4,000 kilograms? same
2. My kite flew 30 meters. How high is that in centimeters? 3,000 cm.
3. Sarah is now 5 feet tall. What is her height in inches? 60 in.
4. How many pints of water is needed to fill a 6-gallon bucket? 48 pt.
5. What metric unit are you going to use to measure the liquid volume in a spoon? ounce
6. About how many centimeters equals 9 inches? 22.86 cm.
7. How many cups are in 3 quarts? 12 cp.
8. Which is heavier, 5 ounces or 5 grams? 5 oz.



4 tons



4,000 kgs.