

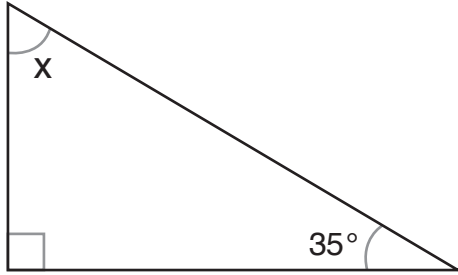
Name: _____

Date: _____

Answers TRI-ANGLES

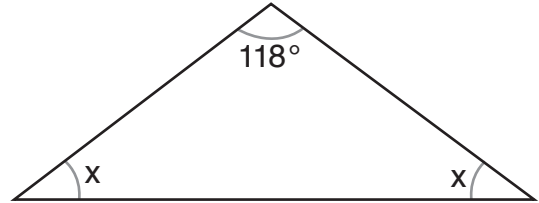
Use addition and subtraction to find the missing angle measurements.
Remember: The sum of the angles in a triangle is always 180 degrees.

1.



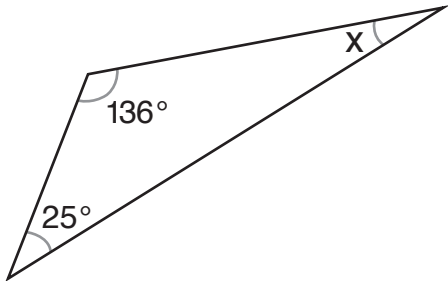
$$x = \underline{55^\circ}$$

2.



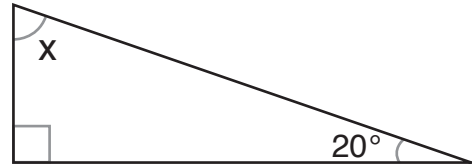
$$x = \underline{31^\circ}$$

3.



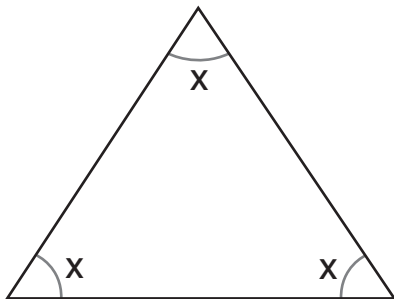
$$x = \underline{19^\circ}$$

4.



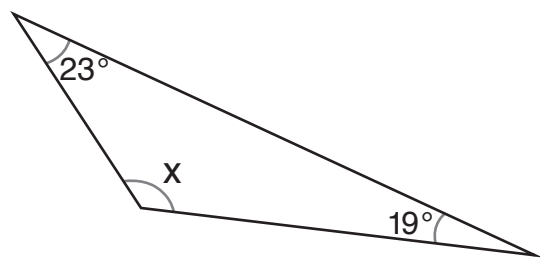
$$x = \underline{70^\circ}$$

5.



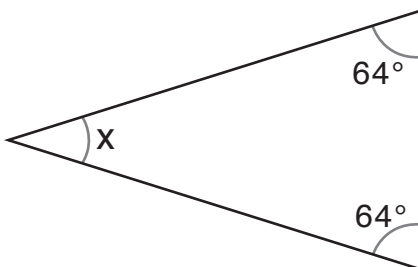
$$x = \underline{60^\circ}$$

6.



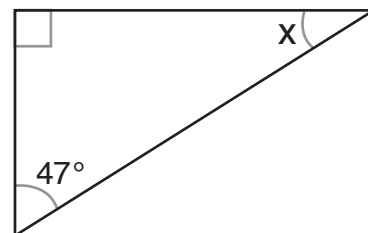
$$x = \underline{138^\circ}$$

7.



$$x = \underline{52^\circ}$$

8.



$$x = \underline{43^\circ}$$