


Answer Key

Tree Bonds


Directions: Write the missing numbers on the trees to make each number bond true. Then fill in the sum for each equation.

1.




$$5 + 1 = \underline{6}$$

2.




$$0 + 3 = \underline{3}$$

3.




$$2 + 3 = \underline{5}$$

4.




$$1 + 4 = \underline{5}$$

5.



$$2 + 0 = \underline{2}$$

6.



$$1 + 1 = \underline{2}$$