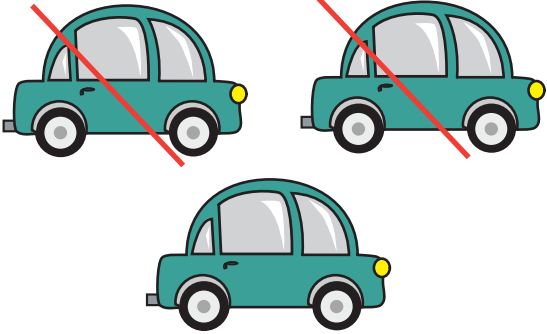
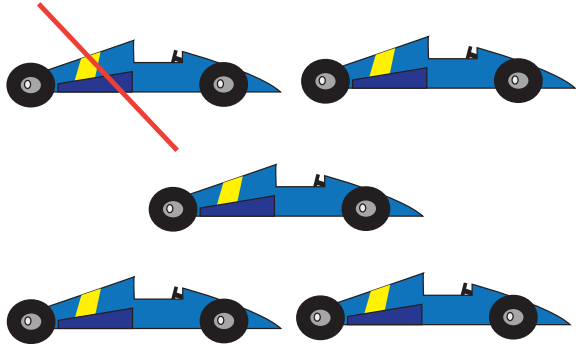

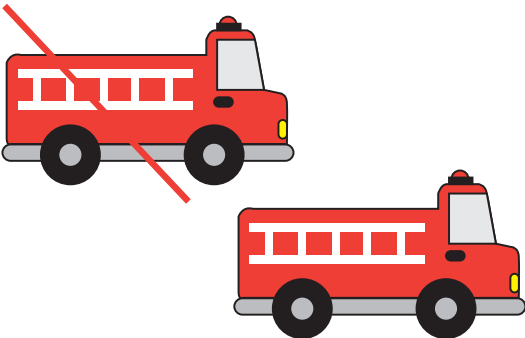


Name: _____

Date: _____

Travel Subtraction

Count and cross out the cars according to the directions. Then write down the numbers and subtract. See the example.

	How many cars are there?	3
	Cross out 2 cars.	$\begin{array}{r} - 2 \\ \hline \end{array}$
	How many cars are left?	1
	How many race cars are there?	5
	Cross out 1 race car.	$\begin{array}{r} - 1 \\ \hline \end{array}$
	How many race cars are left?	4
	How many taxis are there?	4
	Cross out 2 taxis.	$\begin{array}{r} - 2 \\ \hline \end{array}$
	How many taxis are left?	2
	How many fire trucks are there?	2
	Cross out 1 fire truck.	$\begin{array}{r} - 1 \\ \hline \end{array}$
	How many fire trucks are left?	1