







Calculate Elapsed Time #2

Read the analog clocks and write the time in digital form. Then answer the questions.

Start	End	Time Elapsed
 <div style="border: 1px dashed orange; padding: 5px; display: inline-block; margin-left: 10px;">6:15</div>	 <div style="border: 1px dashed orange; padding: 5px; display: inline-block; margin-left: 10px;">9:25</div>	<div style="border: 1px dashed orange; padding: 5px; display: inline-block; margin-left: 10px;">3:10</div> hours and minutes
 <div style="border: 1px dashed orange; padding: 5px; display: inline-block; margin-left: 10px;">4:00</div>	 <div style="border: 1px dashed orange; padding: 5px; display: inline-block; margin-left: 10px;">8:30</div>	<div style="border: 1px dashed orange; padding: 5px; display: inline-block; margin-left: 10px;">4:30</div> hours and minutes
<p>Draw hands on the clocks to match the sentence: Célia started fixing her car at 1:00 p.m. She finished at 5:55 p.m.</p>  		<p>How much time elapsed?</p> <div style="border: 1px dashed orange; padding: 5px; display: inline-block; margin-left: 10px;">4:55</div> hours and minutes