







Name \_\_\_\_\_

Date \_\_\_\_\_

**Answer Key**

# Calculate Elapsed Time #1

Read the analog clocks and write the time in digital form. Then answer the questions.

Start	End	Time Elapsed
 <div data-bbox="418 667 589 772" style="border: 1px dashed red; padding: 5px; display: inline-block;">9:00</div>	 <div data-bbox="998 667 1169 772" style="border: 1px dashed red; padding: 5px; display: inline-block;">9:10</div>	<div data-bbox="1274 667 1445 772" style="border: 1px dashed red; padding: 5px; display: inline-block;">10</div> minutes
 <div data-bbox="418 1129 589 1234" style="border: 1px dashed red; padding: 5px; display: inline-block;">7:00</div>	 <div data-bbox="998 1129 1169 1234" style="border: 1px dashed red; padding: 5px; display: inline-block;">11:00</div>	<div data-bbox="1274 1129 1445 1234" style="border: 1px dashed red; padding: 5px; display: inline-block;">3</div> hours
<p><b>Draw hands on the clocks to match the sentence:</b> Kasemchai went to the fair at 8:00 p.m. and came home at 10:03 p.m.</p>  		<p>How much time elapsed?</p> <div data-bbox="1274 1690 1445 1795" style="border: 1px dashed red; padding: 5px; display: inline-block;">2:03</div> hours and minutes