

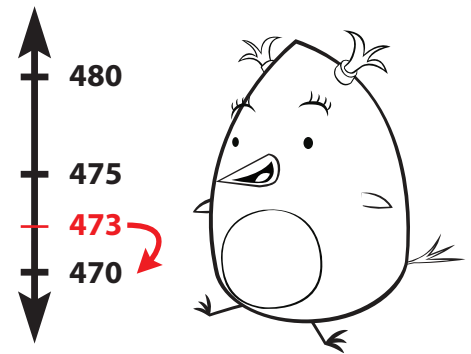
Three-Digit Rounding with Vertical Number Lines

The Rules of Rounding

*If the number you are rounding is followed by 0-4, round **down**.

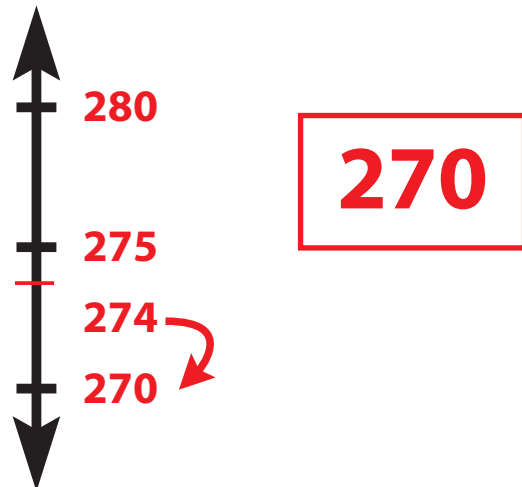
*If the number you are rounding is followed by 5-9, round **up**.

Example: What is **473** rounded to the nearest **ten**? 470

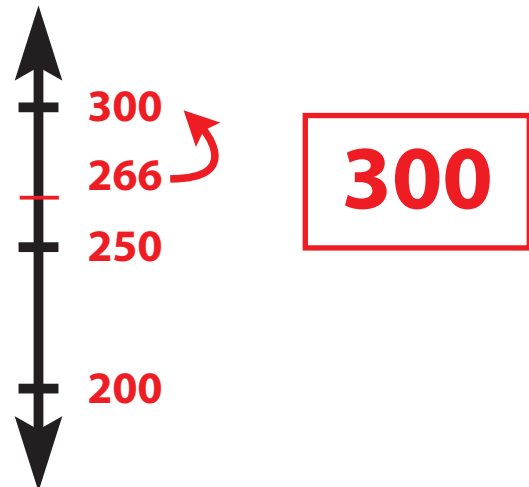


Directions: Round the number to the given place value. Show your work on the number line. Be sure to label the endpoints, midpoint, and your number.

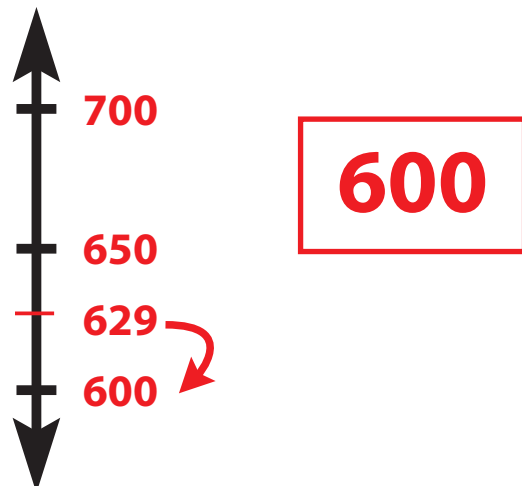
1. What is 274 rounded to the nearest ten?



2. What is 266 rounded to the nearest hundred?



3. What is 629 rounded to the nearest hundred?



4. What is 396 rounded to the nearest ten?

