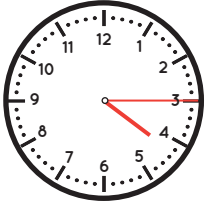


Name _____

Date Answer Key

Telling Time Two Ways: Quarter Hour

Count by 5's to find the time. Write the time two ways:



1. Minutes after hour:

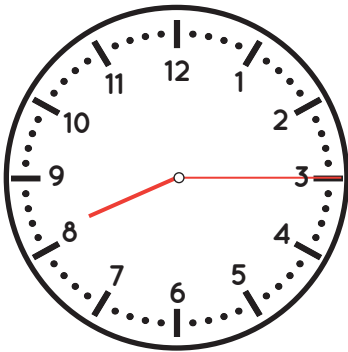
Fifteen minutes after four o'clock.

2. Numerically:

4:15

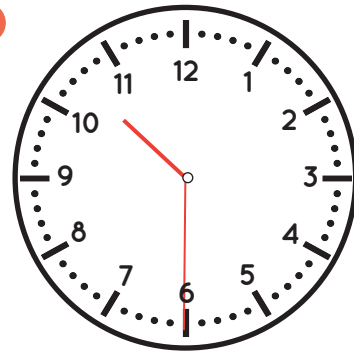


1.



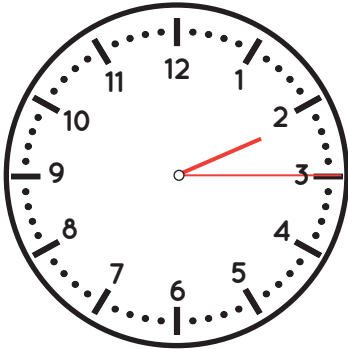
15 minutes after 8 o'clock.
8 : 15

2.



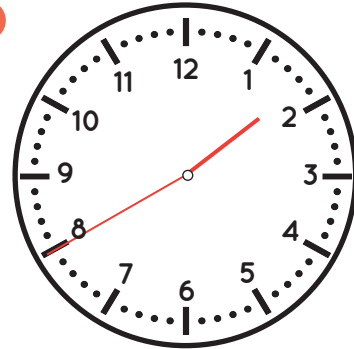
30 minutes after 10 o'clock.
10 : 30

3.



15 minutes after 2 o'clock.
2 : 15

4.



40 minutes after 1 o'clock.
1 : 40