

Name _____

Date _____

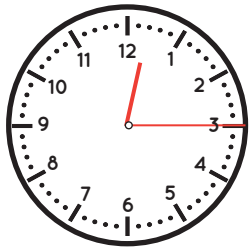
Telling Time

Quarter Hour *Answers*



Circle the correct time shown on each clock.

1.

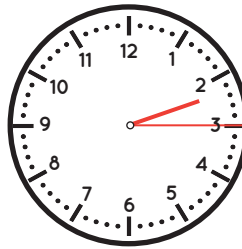


3:15

12:15

12:45

2.

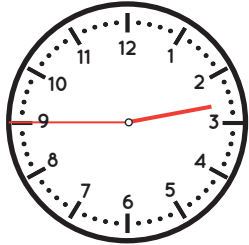


1:15

2:45

2:15

3.

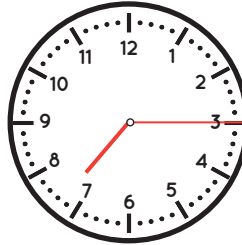


2:45

9:15

3:15

4.

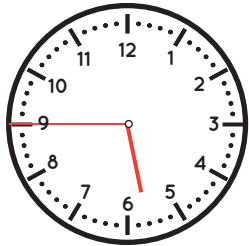


3:45

7:15

7:45

5.

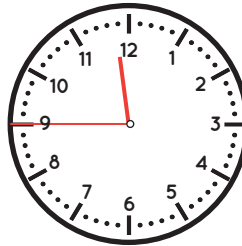


5:45

9:45

6:15

6.

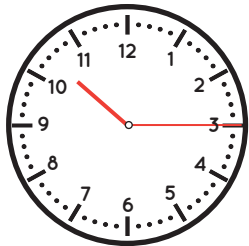


11:45

9:45

12:15

7.

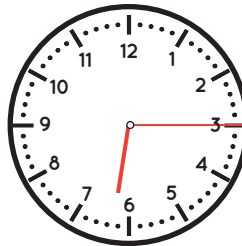


3:45

10:15

10:45

8.

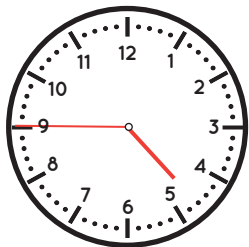


3:15

6:15

3:45

9.

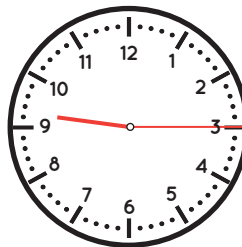


4:45

5:15

5:45

10.



3:45

9:15

3:15