

Name _____

Date _____

Answer Key

Telling Time to 5-Minute Intervals




Write the time shown on each clock in the space below it.



12:20



10:35



1:45




6:25



8:20



7:05



1:10




5:50



3:40



3:55



11:15



12:45