






Farmers Market

Help the farmer record how many vegetables he grew in the table below. First count how many of each type of vegetable he has and mark it in the table. Then write it in number form. Finally, answer the questions.



Type of vegetable	Tally marks	Number
 Cabbage		5
 Tomato	I	6
 Bell pepper	II	7
 Onion	I	6

1. What vegetable does the farmer have the fewest of?

Cabbage

2. What vegetables does he have the most of?

Bell pepper

3. How many vegetables does the farmer have in total?

24