

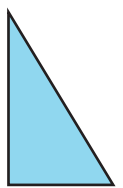
# Symmetry

Look at each shape. Which drawing would complete the other half?  
Color in the bubble next to the correct answer.




1.





2.



3.



4.



5.

