

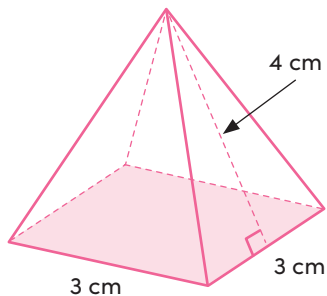
Name \_\_\_\_\_

Date \_\_\_\_\_ **Answer Key**

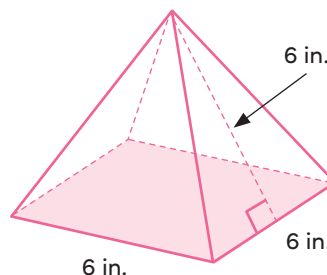
# SURFACE AREA OF PYRAMIDS

To find the **surface area** of a pyramid, find the area of each face. Then add the areas of all the faces together.

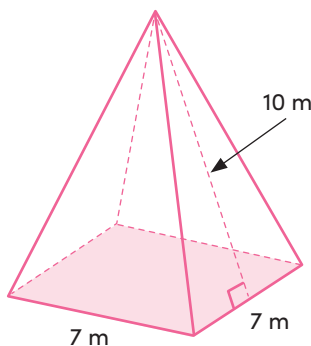
Find the surface area of each square pyramid.



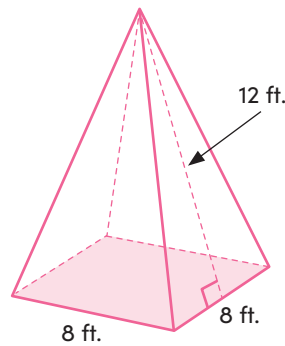
surface area  
**33 cm<sup>2</sup>**



surface area  
**108 in.<sup>2</sup>**

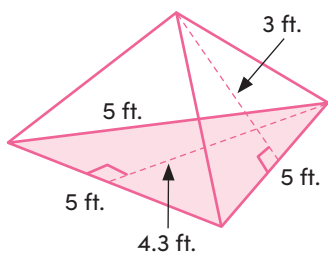


surface area  
**189 m<sup>2</sup>**

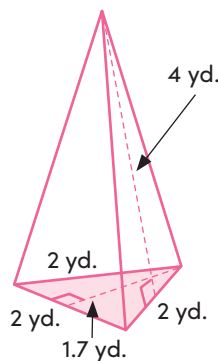


surface area  
**256 ft.<sup>2</sup>**

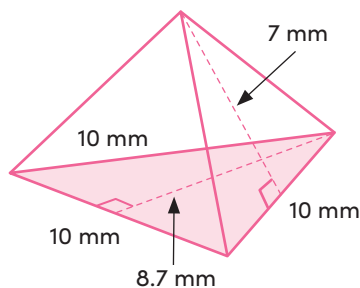
Find the surface area of each triangular pyramid.



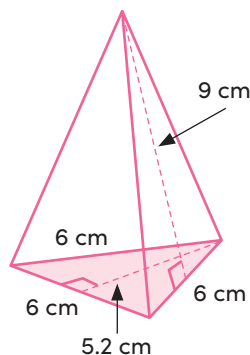
surface area  
**33.25 ft.<sup>2</sup>**



surface area  
**13.7 yd.<sup>2</sup>**



surface area  
**148.5 mm<sup>2</sup>**



surface area  
**96.6 cm<sup>2</sup>**