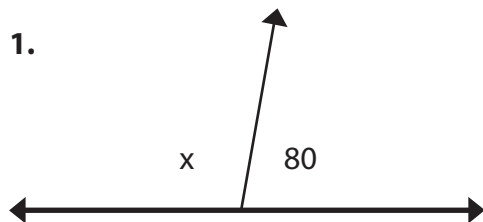
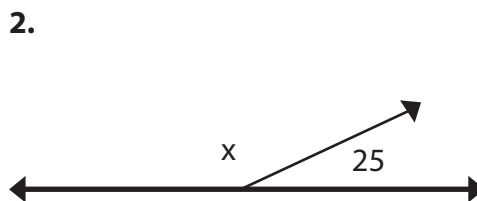


Supplementary Angles

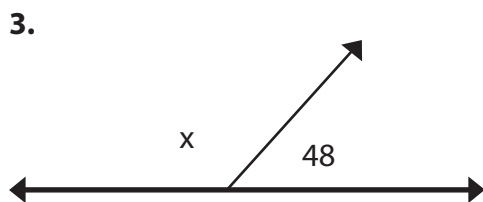
Solve for angle x.



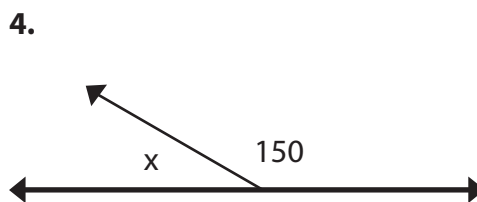
$$x = \underline{100}^\circ$$
$$180 - 80 = 100$$



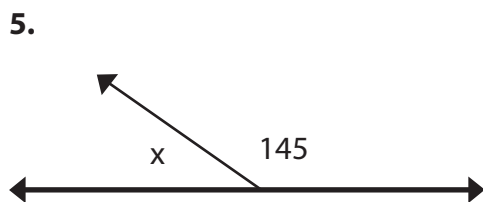
$$x = \underline{155}^\circ$$



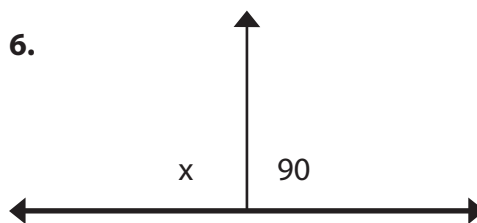
$$x = \underline{132}^\circ$$



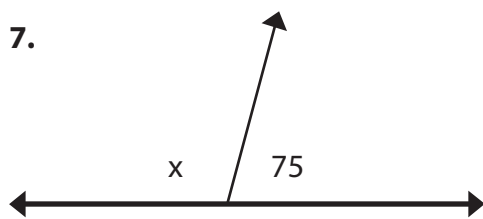
$$x = \underline{30}^\circ$$



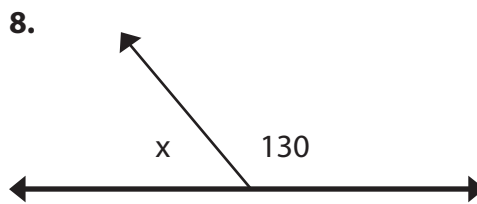
$$x = \underline{35}^\circ$$



$$x = \underline{90}^\circ$$



$$x = \underline{105}^\circ$$



$$x = \underline{50}^\circ$$