





Name _____ Date _____

Answer Key

Bird Subtraction

Count how many birds are in each box. Now take away the shaded pictures. How many are left? Write your answer in the box on the right.

	$\begin{array}{r} 4 \\ -1 \\ \hline 3 \end{array}$
	$\begin{array}{r} 5 \\ -4 \\ \hline 1 \end{array}$
	$\begin{array}{r} 7 \\ -2 \\ \hline 5 \end{array}$
	$\begin{array}{r} 6 \\ -3 \\ \hline 3 \end{array}$